

'Sum'mer Days - Page 1

Add up the numbers on the ice cream scoops and put your answer below.



'Sum'mer Days - Page 2

Add up the numbers on the ice cream scoops and put your answer below.





















'Sum'mer Days - Page 3

Fill in the blank number on the ice cream scoop so that the sum adds up to the number below.

15

20

17

13

8

11

14

10

9

20












'Sum'mer Days - Page 4

Fill in the blank number on the ice cream scoop so that the sum adds up to the number below.

 45	 80	 30	 100	 50
 46	 52	 96	 44	 66


'Sum'mer Days - Page 5

Have a go at creating some sums by putting together your own ice cream cones.













'Sum'mer Days - Page 6

Have a go at creating some sums by putting together your own ice cream cones.













'Sum'mer Days - Answer Sheet

									
<u>6</u>	<u>15</u>	<u>12</u>	<u>13</u>	<u>7</u>	<u>11</u>	<u>15</u>	<u>5</u>	<u>9</u>	<u>9</u>

									
<u>60</u>	<u>60</u>	<u>55</u>	<u>40</u>	<u>120</u>	<u>98</u>	<u>111</u>	<u>58</u>	<u>144</u>	<u>98</u>

									
<u>15</u>	<u>20</u>	<u>17</u>	<u>13</u>	<u>8</u>	<u>11</u>	<u>14</u>	<u>10</u>	<u>9</u>	<u>20</u>

									
<u>45</u>	<u>80</u>	<u>30</u>	<u>100</u>	<u>50</u>	<u>46</u>	<u>52</u>	<u>96</u>	<u>44</u>	<u>66</u>